

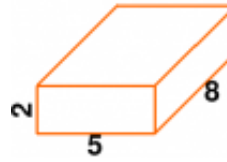
## Volume/Surface Area

1 a.



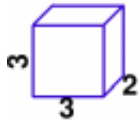
Find the volume of this rectangular prism.

1 b.



Find the volume of this rectangular prism.

2 a.



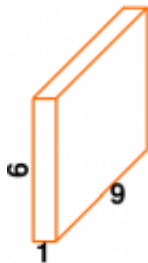
Find the surface area of this rectangular prism.

2 b.



Find the surface area of this rectangular prism.

3 a.



Find the surface area of this rectangular prism.

3 b.



Find the volume of this rectangular prism.

Name: \_\_\_\_\_ Date: \_\_\_\_\_

## Answer Key

<b>1 a.</b> The volume is 32 cubic units.	<b>1 b.</b> The volume is 80 cubic units.
<b>2 a.</b> 42 square units.	<b>2 b.</b> 18 square units.
<b>3 a.</b> 138 square units.	<b>3 b.</b> The volume is 6 cubic units.