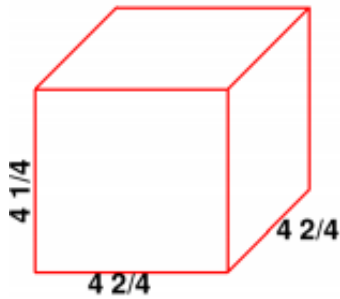


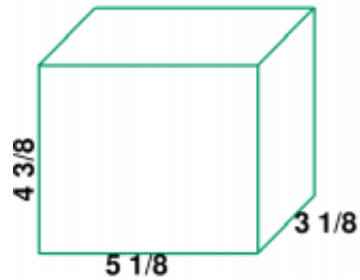
Volume/Surface Area

1 a.



Find the volume of this rectangular prism.

1 b.



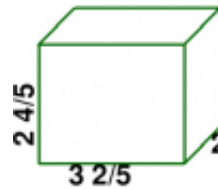
Find the volume of this rectangular prism.

2 a.



Find the volume of this rectangular prism.

2 b.



Find the volume of this rectangular prism.

Name: _____ Date: _____

Answer Key

1 a. The volume is $86 \frac{1}{16}$ cubic units.	1 b. The volume is $70 \frac{35}{512}$ cubic units.
2 a. The volume is $30 \frac{2}{9}$ cubic units.	2 b. The volume is $19 \frac{1}{25}$ cubic units.