


Volume/Surface Area

1 a.



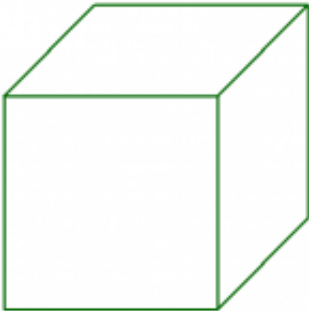
The volume of this cube is 27 cubic units.
What is its surface area?

1 b.



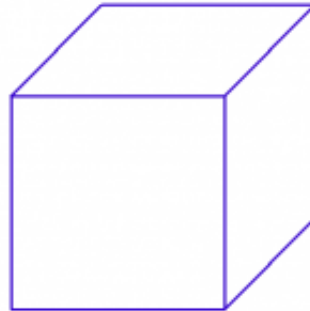
The volume of this cube is 1 cubic units.
What is its edge length?

2 a.



The volume of this cube is 125 cubic units.
What is its surface area?

2 b.



The volume of this cube is 125 cubic units.
What is its edge length?

Name: _____ Date: _____

Answer Key

1 a. The surface area is 54 square units.	1 b. The edge length is 1 units.
2 a. The surface area is 150 square units.	2 b. The edge length is 5 units.