













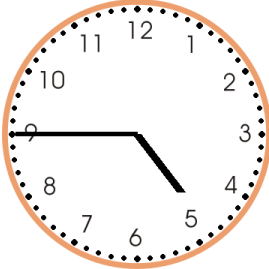
## Telling time Worksheet

Draw the hands on the clock.

<p><b>1 a.</b></p>  <p>4:45</p>	<p><b>1 b.</b></p>  <p>2:00</p>	<p><b>1 c.</b></p>  <p>2:45</p>
<p><b>2 a.</b></p>  <p>5:30</p>	<p><b>2 b.</b></p>  <p>1:15</p>	<p><b>2 c.</b></p>  <p>2:30</p>
<p><b>3 a.</b></p>  <p>8:00</p>	<p><b>3 b.</b></p>  <p>6:45</p>	<p><b>3 c.</b></p>  <p>10:15</p>
<p><b>4 a.</b></p>  <p>7:45</p>	<p><b>4 b.</b></p>  <p>7:15</p>	<p><b>4 c.</b></p>  <p>9:15</p>


## Answer Key

**1 a.**




4:45

**1 b.**




2:00

**1 c.**




2:45

**2 a.**




5:30

**2 b.**




1:15

**2 c.**




2:30

**3 a.**




8:00

**3 b.**




6:45

**3 c.**



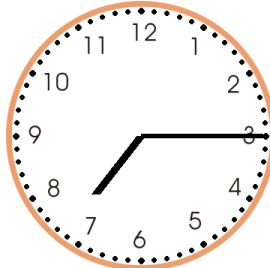
10:15

**4 a.**




7:45

**4 b.**



7:15

**4 c.**



9:15