













Telling time Worksheet

Write the time.

<p>1 a.</p>  <p style="text-align: center;">_ : _</p>	<p>1 b.</p>  <p style="text-align: center;">_ : _</p>	<p>1 c.</p>  <p style="text-align: center;">_ : _</p>
<p>2 a.</p>  <p style="text-align: center;">_ : _</p>	<p>2 b.</p>  <p style="text-align: center;">_ : _</p>	<p>2 c.</p>  <p style="text-align: center;">_ : _</p>
<p>3 a.</p>  <p style="text-align: center;">_ : _</p>	<p>3 b.</p>  <p style="text-align: center;">_ : _</p>	<p>3 c.</p>  <p style="text-align: center;">_ : _</p>
<p>4 a.</p>  <p style="text-align: center;">_ : _</p>	<p>4 b.</p>  <p style="text-align: center;">_ : _</p>	<p>4 c.</p>  <p style="text-align: center;">_ : _</p>

Name: _____ Date: _____

Answer Key

1 a. 3:21	1 b. 5:34	1 c. 0:8
2 a. 2:14	2 b. 0:14	2 c. 11:9
3 a. 8:13	3 b. 1:14	3 c. 3:9
4 a. 10:33	4 b. 6:17	4 c. 6:47