




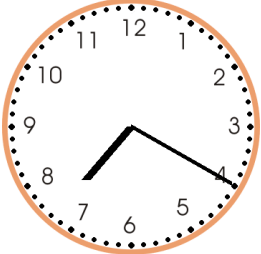








Telling time Worksheet

Write the time.

<p>1 a.</p>  <p style="text-align: center;">_ : _</p>	<p>1 b.</p>  <p style="text-align: center;">_ : _</p>	<p>1 c.</p>  <p style="text-align: center;">_ : _</p>
<p>2 a.</p>  <p style="text-align: center;">_ : _</p>	<p>2 b.</p>  <p style="text-align: center;">_ : _</p>	<p>2 c.</p>  <p style="text-align: center;">_ : _</p>
<p>3 a.</p>  <p style="text-align: center;">_ : _</p>	<p>3 b.</p>  <p style="text-align: center;">_ : _</p>	<p>3 c.</p>  <p style="text-align: center;">_ : _</p>
<p>4 a.</p>  <p style="text-align: center;">_ : _</p>	<p>4 b.</p>  <p style="text-align: center;">_ : _</p>	<p>4 c.</p>  <p style="text-align: center;">_ : _</p>

Name: _____ Date: _____

Answer Key

1 a. 6:10	1 b. 2:15	1 c. 1:10
2 a. 11:25	2 b. 5:5	2 c. 7:20
3 a. 11:45	3 b. 5:10	3 c. 10:20
4 a. 10:00	4 b. 9:35	4 c. 9:15