




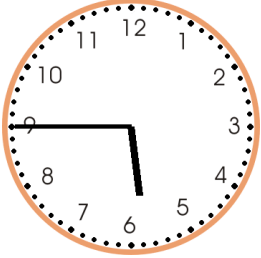








Telling time Worksheet

Write the time.

<p>1 a.</p>  <p style="text-align: center;">_ : _</p>	<p>1 b.</p>  <p style="text-align: center;">_ : _</p>	<p>1 c.</p>  <p style="text-align: center;">_ : _</p>
<p>2 a.</p>  <p style="text-align: center;">_ : _</p>	<p>2 b.</p>  <p style="text-align: center;">_ : _</p>	<p>2 c.</p>  <p style="text-align: center;">_ : _</p>
<p>3 a.</p>  <p style="text-align: center;">_ : _</p>	<p>3 b.</p>  <p style="text-align: center;">_ : _</p>	<p>3 c.</p>  <p style="text-align: center;">_ : _</p>
<p>4 a.</p>  <p style="text-align: center;">_ : _</p>	<p>4 b.</p>  <p style="text-align: center;">_ : _</p>	<p>4 c.</p>  <p style="text-align: center;">_ : _</p>

Name: _____ Date: _____

Answer Key

1 a. 4:15	1 b. 3:45	1 c. 11:15
2 a. 10:15	2 b. 8:30	2 c. 5:45
3 a. 12:00	3 b. 5:00	3 c. 0:45
4 a. 9:30	4 b. 3:15	4 c. 10:45