













Telling time Worksheet

Write the time.

<p>1 a.</p>  <p>_____ : _____</p>	<p>1 b.</p>  <p>_____ : _____</p>	<p>1 c.</p>  <p>_____ : _____</p>
<p>2 a.</p>  <p>_____ : _____</p>	<p>2 b.</p>  <p>_____ : _____</p>	<p>2 c.</p>  <p>_____ : _____</p>
<p>3 a.</p>  <p>_____ : _____</p>	<p>3 b.</p>  <p>_____ : _____</p>	<p>3 c.</p>  <p>_____ : _____</p>
<p>4 a.</p>  <p>_____ : _____</p>	<p>4 b.</p>  <p>_____ : _____</p>	<p>4 c.</p>  <p>_____ : _____</p>

Name: _____ Date: _____

Answer Key

1 a. 10:30	1 b. 2:00	1 c. 9:30
2 a. 11:00	2 b. 8:30	2 c. 10:00
3 a. 9:00	3 b. 6:00	3 c. 1:00
4 a. 12:00	4 b. 4:30	4 c. 2:30