













Telling time Worksheet

Write the time.

<p>1 a.</p>  <p style="text-align: center;">_____ : _____</p>	<p>1 b.</p>  <p style="text-align: center;">_____ : _____</p>	<p>1 c.</p>  <p style="text-align: center;">_____ : _____</p>
<p>2 a.</p>  <p style="text-align: center;">_____ : _____</p>	<p>2 b.</p>  <p style="text-align: center;">_____ : _____</p>	<p>2 c.</p>  <p style="text-align: center;">_____ : _____</p>
<p>3 a.</p>  <p style="text-align: center;">_____ : _____</p>	<p>3 b.</p>  <p style="text-align: center;">_____ : _____</p>	<p>3 c.</p>  <p style="text-align: center;">_____ : _____</p>
<p>4 a.</p>  <p style="text-align: center;">_____ : _____</p>	<p>4 b.</p>  <p style="text-align: center;">_____ : _____</p>	<p>4 c.</p>  <p style="text-align: center;">_____ : _____</p>

Name: _____ Date: _____

Answer Key

1 a. 11:00	1 b. 10:00	1 c. 3:00
2 a. 8:00	2 b. 6:00	2 c. 12:00
3 a. 9:00	3 b. 7:00	3 c. 5:00
4 a. 4:00	4 b. 1:00	4 c. 2:00