


## Telling time Worksheet


Write the time.

1 a.




\_\_\_\_\_ : \_\_\_\_\_

1 b.




\_\_\_\_\_ : \_\_\_\_\_

2 a.




\_\_\_\_\_ : \_\_\_\_\_

2 b.




\_\_\_\_\_ : \_\_\_\_\_

3 a.



\_\_\_\_\_ : \_\_\_\_\_

3 b.



\_\_\_\_\_ : \_\_\_\_\_

Name: \_\_\_\_\_ Date: \_\_\_\_\_

## Answer Key

1 a.	10:30	1 b.	7:30
2 a.	6:23	2 b.	2:50
3 a.	4:6	3 b.	4:11