


## Telling time Worksheet


Write the time.

1 a.




\_\_\_\_\_ : \_\_\_\_\_

1 b.




\_\_\_\_\_ : \_\_\_\_\_

2 a.




\_\_\_\_\_ : \_\_\_\_\_

2 b.




\_\_\_\_\_ : \_\_\_\_\_

3 a.



\_\_\_\_\_ : \_\_\_\_\_

3 b.



\_\_\_\_\_ : \_\_\_\_\_

Name: \_\_\_\_\_ Date: \_\_\_\_\_

## Answer Key

<b>1 a.</b>	5:00	<b>1 b.</b>	9:00
<b>2 a.</b>	6:00	<b>2 b.</b>	1:00
<b>3 a.</b>	10:00	<b>3 b.</b>	8:00