



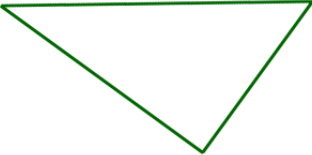
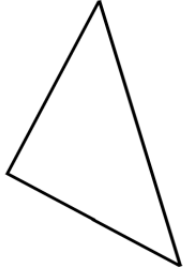


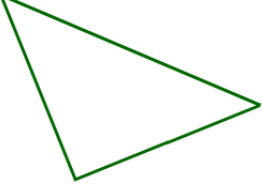


# Classify Triangles Worksheet

Classify the triangles by their sides *and* angles (such as isosceles obtuse).

<p>1 a.</p> 	<p>1 b.</p> 	<p>1 c.</p> 
<p>2 a.</p> 	<p>2 b.</p> 	<p>2 c.</p> 
<p>3 a.</p> 	<p>3 b.</p> 	<p>3 c.</p> 

Name: \_\_\_\_\_ Date: \_\_\_\_\_

## Answer Key

1 a. equilateral, acute

1 b. isosceles, acute

1 c. equilateral, acute

2 a. isosceles, obtuse

2 b. scalene, right

2 c. isosceles, right

3 a. isosceles, obtuse

3 b. isosceles, acute

3 c. isosceles, right