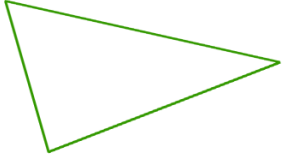
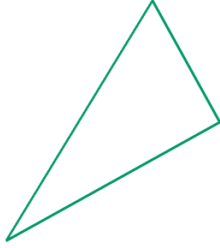
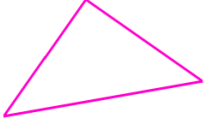
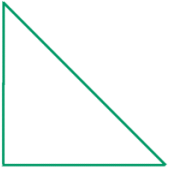
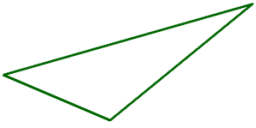



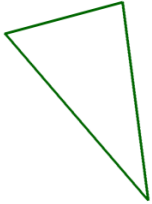
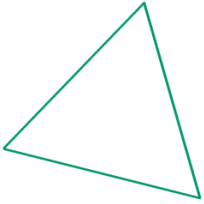

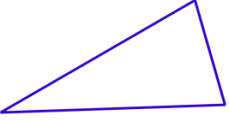





## Classify Triangles Worksheet

Classify the triangles by their sides (equilateral, isosceles, scalene).

<p><b>1 a.</b></p> 	<p><b>1 b.</b></p> 	<p><b>1 c.</b></p> 
<p><b>2 a.</b></p> 	<p><b>2 b.</b></p> 	<p><b>2 c.</b></p> 
<p><b>3 a.</b></p> 	<p><b>3 b.</b></p> 	<p><b>3 c.</b></p> 
<p><b>4 a.</b></p> 	<p><b>4 b.</b></p> 	<p><b>4 c.</b></p> 
<p><b>5 a.</b></p> 	<p><b>5 b.</b></p> 	<p><b>5 c.</b></p> 

Name: \_\_\_\_\_ Date: \_\_\_\_\_

## Answer Key

1 a. scalene

1 b. scalene

1 c. isosceles

2 a. isosceles

2 b. scalene

2 c. equilateral

3 a. isosceles

3 b. scalene

3 c. scalene

4 a. equilateral

4 b. scalene

4 c. isosceles

5 a. scalene

5 b. isosceles

5 c. scalene