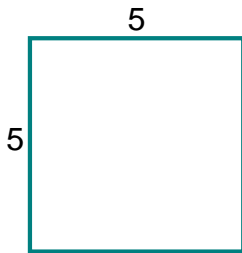
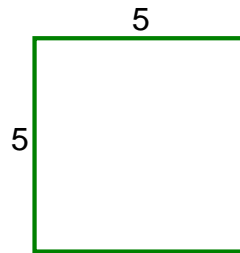


## Area / Perimeter Worksheet

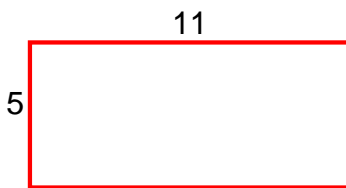
1 a. Find the area of the square.



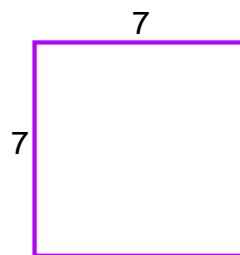
1 b. Find the perimeter of the square.



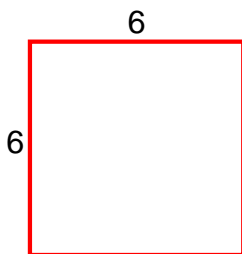
2 a. Find the perimeter of the rectangle.



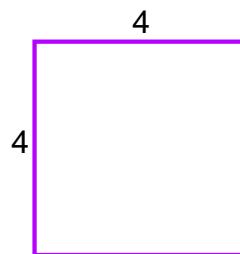
2 b. Find the area of the rectangle.



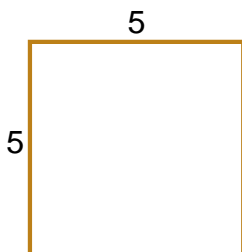
3 a. Find the perimeter of the square.



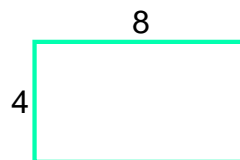
3 b. Find the area of the square.



4 a. Find the perimeter of the rectangle.



4 b. Find the perimeter of the rectangle.



Name: \_\_\_\_\_ Date: \_\_\_\_\_

## Answer Key

1 a. 25 square units	1 b. 20
2 a. 32	2 b. 49 square units
3 a. 24	3 b. 16 square units
4 a. 20	4 b. 24