



## Area / Perimeter Worksheet

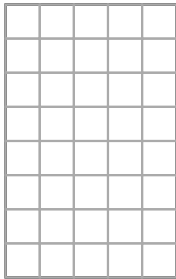
1 a. Draw a rectangle with an area of 12 square units.




1 b. Find the area of this rectangle.




2 a. Find the area of this rectangle.




2 b. Find the area of this square.



3 a. Find the area of this rectangle.



3 b. Find the area of this square.



## Answer Key

<p>1 a. Answers vary. All the possibilities for the number of rows and columns are listed below. Some of them may not fit into the grid provided.</p> <p>1 row, 12 columns OR 2 rows, 6 columns OR 3 rows, 4 columns OR 4 rows, 3 columns OR 6 rows, 2 columns OR 12 rows, 1 column</p>	<p>1 b. The area is 12 square units.</p>
<p>2 a. The area is 40 square units.</p>	<p>2 b. The area is 36 square units.</p>
<p>3 a. The area is 21 square units.</p>	<p>3 b. The area is 16 square units.</p>