



Area / Perimeter Worksheet

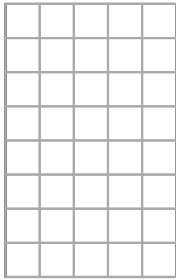
- 1 a. Find the area and perimeter of this rectangle.



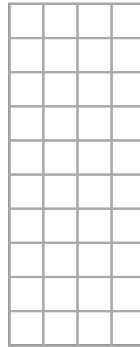
- 1 b. Find the area and perimeter of this rectangle.




- 2 a. Find the area and perimeter of this rectangle.




- 2 b. Find the area and perimeter of this rectangle.



- 3 a. Find the area and perimeter of this rectangle.



- 3 b. Find the area and perimeter of this rectangle.



Name: _____ Date: _____

Answer Key

1 a. The area is 48 square units and the perimeter is 28 units.	1 b. The area is 36 square units and the perimeter is 30 units.
2 a. The area is 40 square units and the perimeter is 26 units.	2 b. The area is 40 square units and the perimeter is 28 units.
3 a. The area is 54 square units and the perimeter is 30 units.	3 b. The area is 36 square units and the perimeter is 26 units.