
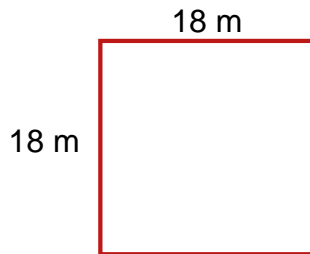


Area / Perimeter Worksheet

- 1 a. Find the area and perimeter of this rectangle.




- 2 a. Find the perimeter of the square.



- 3 a. The sides of a rectangle are 4 m and 10 m. Find its area.

- 4 a. Find the area and perimeter of this rectangle.



Name: _____ Date: _____

Answer Key

1 a. The area is 21 square units and the perimeter is 20 units.

2 a. 72 m

3 a. 40 m^2

4 a. The area is 54 square units and the perimeter is 30 units.