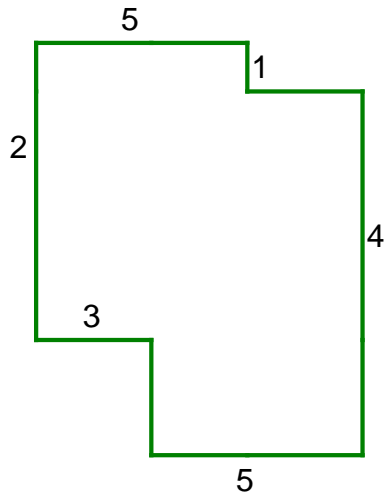
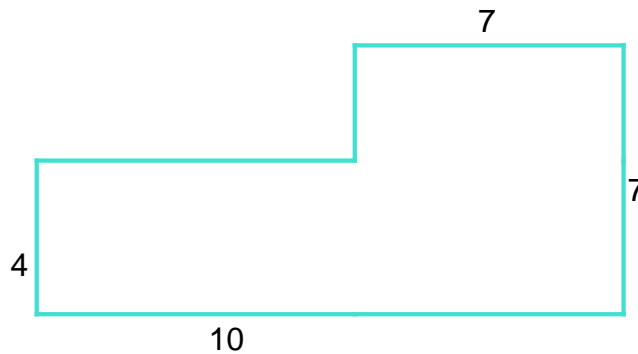


Area / Perimeter Worksheet

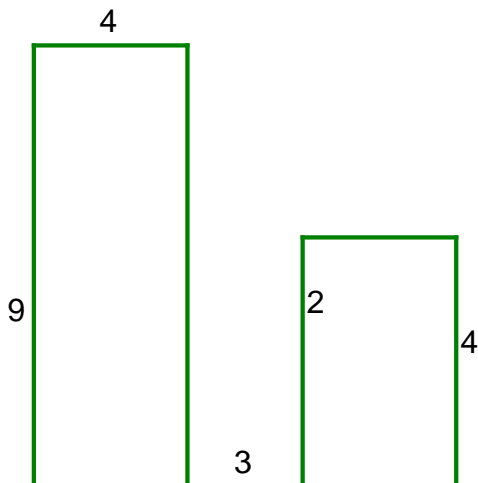
1 a. Find the area and perimeter of the shape.



2 a. Find the area and perimeter of the shape.



3 a. Find the area and perimeter of the shape.



Name: _____ Date: _____

11

Name: _____ Date: _____

Answer Key

1 a. The area is 28 and the perimeter is 26.

2 a. The area is 61 and the perimeter is 34.

3 a. The area is 58 and the perimeter is 44.