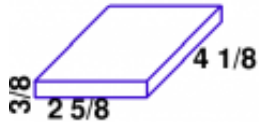


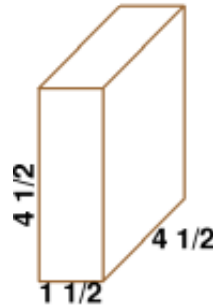
Volume/Surface Area

1 a.



Find the volume of this rectangular prism.

1 b.




Find the volume of this rectangular prism.

2 a.



Find the volume of this rectangular prism.

2 b.



Find the volume of this rectangular prism.

Name: _____ Date: _____

Answer Key

1 a. The volume is $4\frac{31}{512}$ cubic units.	1 b. The volume is $30\frac{3}{8}$ cubic units.
2 a. The volume is $2\frac{7}{24}$ cubic units.	2 b. The volume is $5\frac{5}{16}$ cubic units.