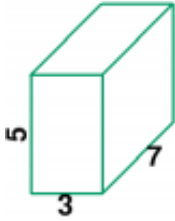


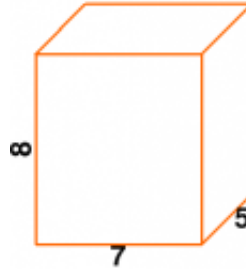
Volume/Surface Area

1 a.



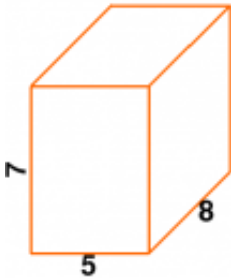
Find the surface area of this rectangular prism.

1 b.



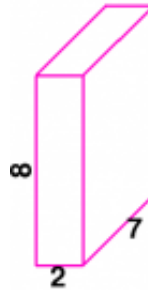
Find the volume of this rectangular prism.

2 a.



Find the volume of this rectangular prism.

2 b.



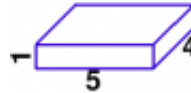
Find the surface area of this rectangular prism.

3 a.



Find the surface area of this rectangular prism.

3 b.



Find the surface area of this rectangular prism.

Name: _____ Date: _____

Answer Key

1 a. 142 square units.	1 b. The volume is 280 cubic units.
2 a. The volume is 280 cubic units.	2 b. 172 square units.
3 a. 88 square units.	3 b. 58 square units.