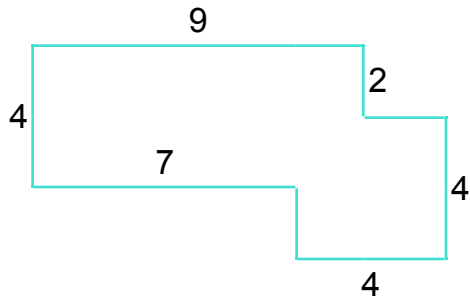
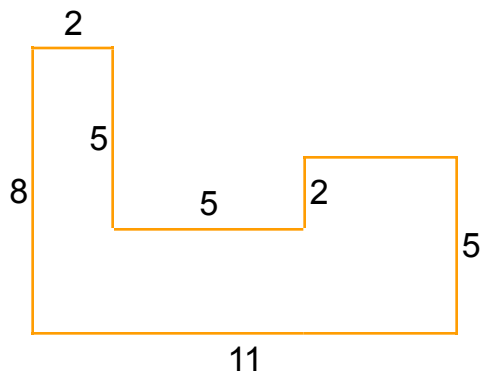


Area / Perimeter Worksheet

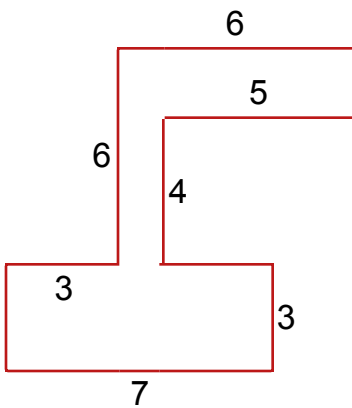
1 a. Find the area and perimeter of the shape.



2 a. Find the area and perimeter of the shape.



3 a. Find the area and perimeter of the shape.



Answer Key

1 a. The area is 48 and the perimeter is 34.

2 a. The area is 51 and the perimeter is 42.

3 a. The area is 37 and the perimeter is 42.