
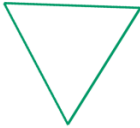

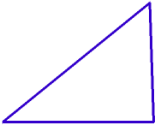

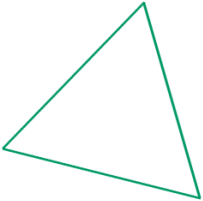
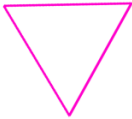






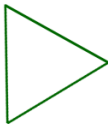
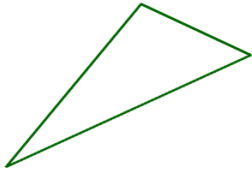


Classify Triangles Worksheet

Classify the triangles by their sides (equilateral, isosceles, scalene).

<p>1 a.</p> 	<p>1 b.</p> 	<p>1 c.</p> 
<p>2 a.</p> 	<p>2 b.</p> 	<p>2 c.</p> 
<p>3 a.</p> 	<p>3 b.</p> 	<p>3 c.</p> 
<p>4 a.</p> 	<p>4 b.</p> 	<p>4 c.</p> 
<p>5 a.</p> 	<p>5 b.</p> 	<p>5 c.</p> 

Name: _____ Date: _____

Answer Key

1 a. equilateral

1 b. equilateral

1 c. scalene

2 a. scalene

2 b. isosceles

2 c. equilateral

3 a. equilateral

3 b. isosceles

3 c. isosceles

4 a. scalene

4 b. equilateral

4 c. isosceles

5 a. scalene

5 b. equilateral

5 c. scalene