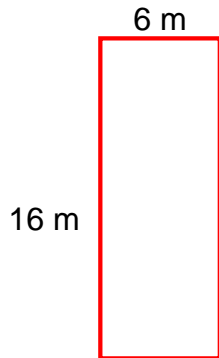


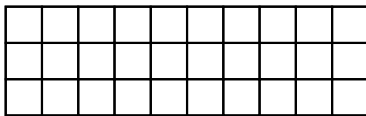
Area / Perimeter Worksheet

- 1 a. Find the perimeter of the rectangle.

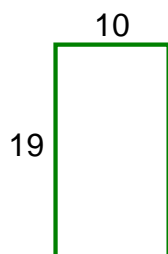


- 2 a. The sides of a rectangle are 20 in and 13 in. Find its area.

- 3 a. Find the area and perimeter of this rectangle.



- 4 a. Find the perimeter of the rectangle.



Name: _____ Date: _____

Answer Key

1 a. 44 m

2 a. 260 in^2

3 a. The area is 30 square units and the perimeter is 26 units.

4 a. 58