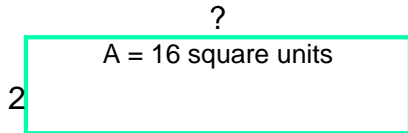
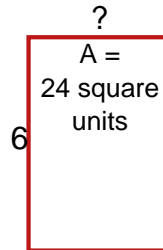


Area / Perimeter Worksheet

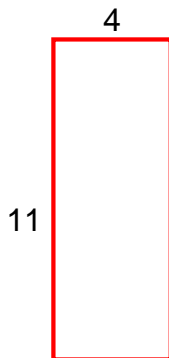
- 1 a. Find the missing side length, when the area is 16 square units.



- 1 b. Find the missing side length, when the area is 24 square units.



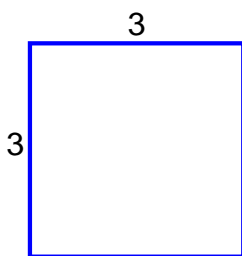
- 2 a. Find the perimeter of the rectangle.



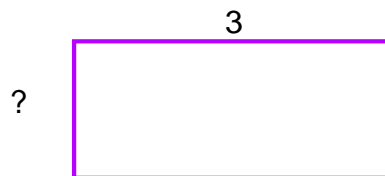
- 2 b. Find the perimeter of the rectangle.



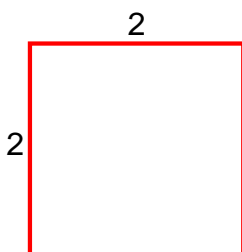
- 3 a. Find the area of the rectangle.



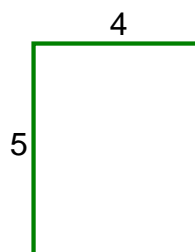
- 3 b. Find the missing side length, when the perimeter is 20.



- 4 a. Find the area of the square.



- 4 b. Find the area of the rectangle.



Name: _____ Date: _____

Answer Key

1 a. 8

1 b. 4

2 a. 30

2 b. 26

3 a. 9 square units

3 b. 3

4 a. 4 square units

4 b. 20 square units