


## Telling time Worksheet


Write the time.

1 a.




\_\_\_\_\_ : \_\_\_\_\_

1 b.




\_\_\_\_\_ : \_\_\_\_\_

2 a.




\_\_\_\_\_ : \_\_\_\_\_

2 b.




\_\_\_\_\_ : \_\_\_\_\_

3 a.



\_\_\_\_\_ : \_\_\_\_\_

3 b.



\_\_\_\_\_ : \_\_\_\_\_

Name: \_\_\_\_\_ Date: \_\_\_\_\_

## Answer Key

<b>1 a.</b>	0:51	<b>1 b.</b>	0:36
<b>2 a.</b>	3:18	<b>2 b.</b>	3:27
<b>3 a.</b>	8:34	<b>3 b.</b>	4:17