













Telling time Worksheet

Write the time.

<p>1 a.</p>  <p style="text-align: center;">_ : _</p>	<p>1 b.</p>  <p style="text-align: center;">_ : _</p>	<p>1 c.</p>  <p style="text-align: center;">_ : _</p>
<p>2 a.</p>  <p style="text-align: center;">_ : _</p>	<p>2 b.</p>  <p style="text-align: center;">_ : _</p>	<p>2 c.</p>  <p style="text-align: center;">_ : _</p>
<p>3 a.</p>  <p style="text-align: center;">_ : _</p>	<p>3 b.</p>  <p style="text-align: center;">_ : _</p>	<p>3 c.</p>  <p style="text-align: center;">_ : _</p>
<p>4 a.</p>  <p style="text-align: center;">_ : _</p>	<p>4 b.</p>  <p style="text-align: center;">_ : _</p>	<p>4 c.</p>  <p style="text-align: center;">_ : _</p>

Name: _____ Date: _____

Answer Key

1 a. 10:55	1 b. 3:55	1 c. 11:00
2 a. 1:25	2 b. 8:15	2 c. 6:45
3 a. 2:25	3 b. 7:10	3 c. 4:50
4 a. 11:25	4 b. 11:10	4 c. 2:30