














Telling time Worksheet

Draw the hands on the clock.

<p>1 a.</p>  <p style="text-align: center; margin-top: 10px;">5:54</p>	<p>1 b.</p>  <p style="text-align: center; margin-top: 10px;">6:56</p>	<p>1 c.</p>  <p style="text-align: center; margin-top: 10px;">7:59</p>
<p>2 a.</p>  <p style="text-align: center; margin-top: 10px;">11:47</p>	<p>2 b.</p>  <p style="text-align: center; margin-top: 10px;">9:00</p>	<p>2 c.</p>  <p style="text-align: center; margin-top: 10px;">3:14</p>
<p>3 a.</p>  <p style="text-align: center; margin-top: 10px;">11:18</p>	<p>3 b.</p>  <p style="text-align: center; margin-top: 10px;">3:51</p>	<p>3 c.</p>  <p style="text-align: center; margin-top: 10px;">2:03</p>
<p>4 a.</p>  <p style="text-align: center; margin-top: 10px;">11:40</p>	<p>4 b.</p>  <p style="text-align: center; margin-top: 10px;">3:40</p>	<p>4 c.</p>  <p style="text-align: center; margin-top: 10px;">1:36</p>


Answer Key

1 a.




5:54

1 b.




6:56

1 c.




7:59

2 a.




11:47

2 b.




9:00

2 c.




3:14

3 a.




11:18

3 b.




3:51

3 c.




2:03

4 a.




11:40

4 b.



3:40

4 c.



1:36