













# Telling time Worksheet

Write the time.

<p><b>1 a.</b></p>  <p>_____ : _____</p>	<p><b>1 b.</b></p>  <p>_____ : _____</p>	<p><b>1 c.</b></p>  <p>_____ : _____</p>
<p><b>2 a.</b></p>  <p>_____ : _____</p>	<p><b>2 b.</b></p>  <p>_____ : _____</p>	<p><b>2 c.</b></p>  <p>_____ : _____</p>
<p><b>3 a.</b></p>  <p>_____ : _____</p>	<p><b>3 b.</b></p>  <p>_____ : _____</p>	<p><b>3 c.</b></p>  <p>_____ : _____</p>
<p><b>4 a.</b></p>  <p>_____ : _____</p>	<p><b>4 b.</b></p>  <p>_____ : _____</p>	<p><b>4 c.</b></p>  <p>_____ : _____</p>

Name: \_\_\_\_\_ Date: \_\_\_\_\_

## Answer Key

<b>1 a.</b> 11:00	<b>1 b.</b> 2:00	<b>1 c.</b> 3:00
<b>2 a.</b> 8:00	<b>2 b.</b> 4:00	<b>2 c.</b> 7:00
<b>3 a.</b> 1:00	<b>3 b.</b> 9:00	<b>3 c.</b> 10:00
<b>4 a.</b> 6:00	<b>4 b.</b> 12:00	<b>4 c.</b> 5:00